


1st Grade

Common Core Aligned Morning Work 3RD QUARTER



Morning Work

Name: _____ First Name _____ Last Name _____

Date: _____ Month _____ Date _____ Year _____

Color the circle that shows 2 halves RED.
Circle that circle that shows 4 quarters BLUE.

Write 4 words in the -at family.

1. _____
2. _____
3. _____
4. _____

The bat is _____

©Tobin, February 2015

Morning Work

Name: _____ First Name _____ Last Name _____

Date: _____ Month _____ Date _____ Year _____

Find the sum for this part-part whole mat.

--	--

Make a number addition bond.

5

Circle the pictures with a blend at the beginning.

Real Words	Nonsense Words
------------	----------------

Word Bank:

Created by Jessica Tobin

Skills-

MATH:

Measuring
Time

Graphs

Halves and Quarters

Word Problems

Fact Families

Part/Part/Whole Mats

Number Bonds

Adding/Subtracting within 20

Adding Numbers Vertically

ELA:

Punctuation

Capitalizing

Ending Blends

Decoding

ABC Order

Compound Words

Root Words

Word Families


Morning Work

Name: _____
First Name Last Name

Date: _____
Month Date , Year

What time do these clocks show?





Solve these vertical math problems.

$$\begin{array}{r} 5 \\ +7 \\ \hline \end{array}$$

$$\begin{array}{r} 6 \\ +6 \\ \hline \end{array}$$

$$\begin{array}{r} 3 \\ +2 \\ \hline \end{array}$$

$$\begin{array}{r} 4 \\ +4 \\ \hline \end{array}$$

$$\begin{array}{r} 7 \\ +3 \\ \hline \end{array}$$

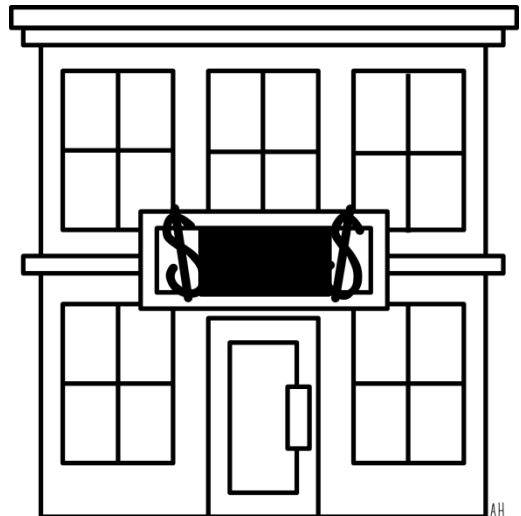
$$\begin{array}{r} 8 \\ +3 \\ \hline \end{array}$$

Favorite Colors

Red	19
Green	17
Blue	16

What color is the most favorite?

Fill in the missing blend.



ba _____

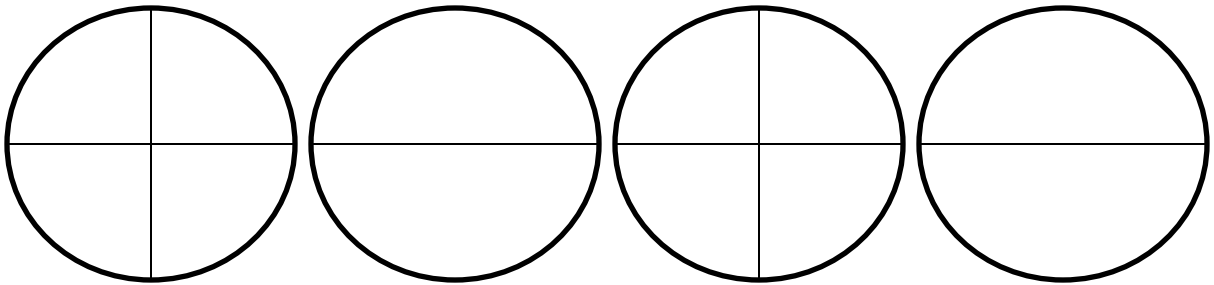
Morning Work

Name: _____
First Name Last Name

Date: _____
Month Date , Year

Color the circle that shows 2 halves RED.

Circle that circle that shows 4 quarters BLUE.



Write 4 words in the -at word family.

-at

1. _____

2. _____

3. _____

4. _____

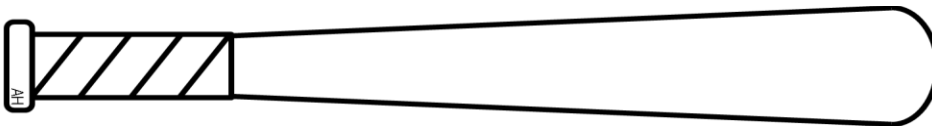
Circle the root words.

banker teacher

biggest working

shouting harder

The bat is _____ paperclips long.



Morning Work

Name: _____
First Name Last Name

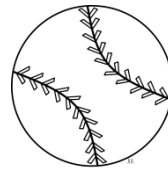
Date: _____
Month Date , Year

Jill had 3 boxes. John had 5 boxes. How many boxes did Jill and John have together?

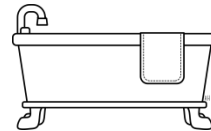
_____ + _____ = _____

_____ boxes

Circle the correct compound word.



baseball or birdhouse?



basketball or bathtub?

Put the words in ABC Order.

1.

2.

3.

4.

5.

Word Bank

apple dog eagle
bee cat

What do these clocks show?



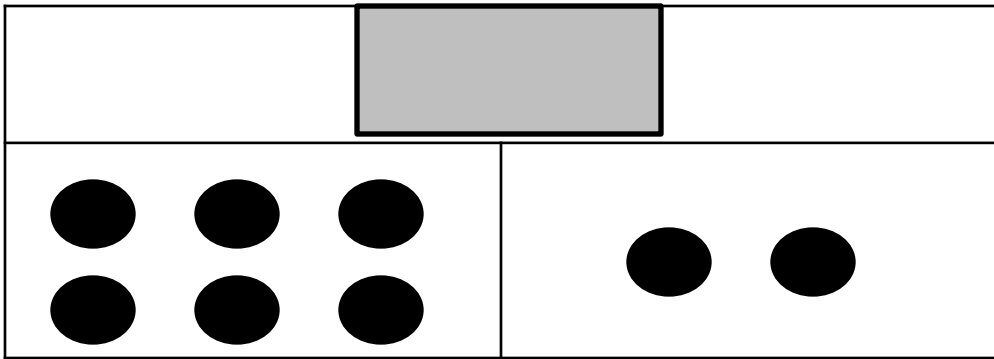


Morning Work

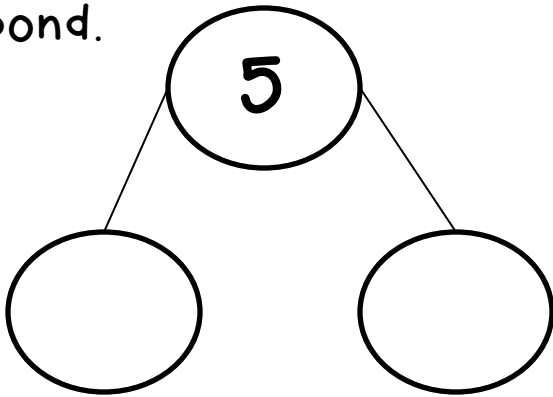
Name: _____
First Name Last Name

Date: _____
Month Date , Year


Find the sum for this part-part whole mat.



Make a number addition bond.



Circle the pictures with a blend at the beginning.



Real Words

Nonsense Words

Word Bank:

cat jib peg mig pig hat ham vib

Morning Work

Name: _____
First Name Last Name

Date: _____
Month Date , Year

Write 5 words in the -et word family.

-et

1.


2.

3.


4.

5.

Split into 2 halves.




Split into 4 quarters.



What do these clocks show?





Circle the correct compound word.



berrystraw or strawberry?



rainbow or rainow?

Morning Work

Name: _____
First Name Last Name

Date: _____
Month Date , Year

Solve the addition facts.

$$5+4=$$

$$3+6=$$

$$4+7=$$

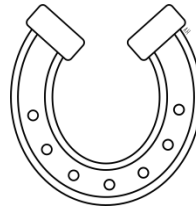
$$5+8=$$

$$3+9=$$

Circle the correct compound word.




horseshoe
sunflower
snowman




rainbow
horseshoe
hotdog

Fill in the missing blend.



bea_____

What do these clocks show?





Morning Work

Name: _____
First Name Last Name

Date: _____
Month Date , Year

Put these words into the correct ABC order.

water
cloud
rain
puddle
drop

1.

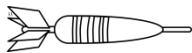
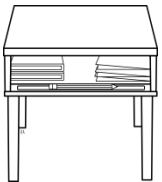
2.

3.

4.

5.

Circle words that have an ending blend.



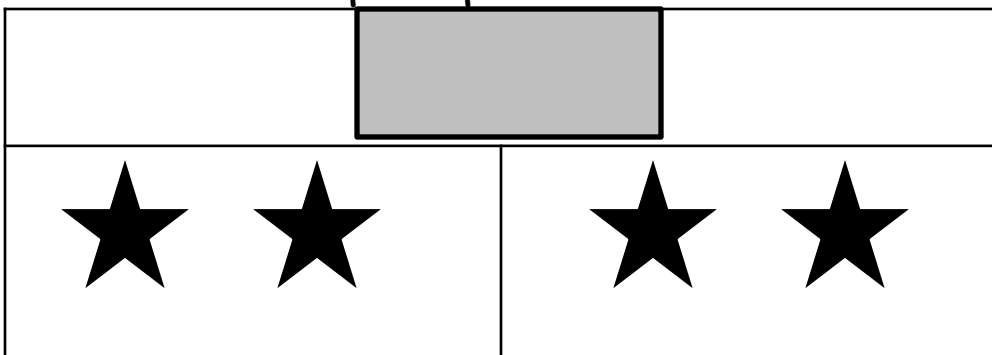
Add these problems.

$$11 + 2 = \underline{\hspace{2cm}}$$

$$3 + 9 = \underline{\hspace{2cm}}$$

$$5 + 7 = \underline{\hspace{2cm}}$$

Find the sum for this part-part whole mat.



Morning Work

Name: _____
First Name Last Name

Date: _____
Month Date , Year

Circle the real words.
Cross out nonsense words.


cart tank
kite toch
shib lave
star mich


Write the turn-around fact.

$$4 + 3 = 7$$

$$\underline{\quad} + \underline{\quad} = 7$$

What do these clocks show?





Write 5 words in the -ig word family.

-ig

1. _____

2. _____

3. _____

4. _____

5. _____

Morning Work

Name: _____
First Name Last Name

Date: _____
Month Date , Year

Real Words	Nonsense Words

Word Bank

frit track punt trip quim greb

Solve these problems.

$$\begin{array}{r} 9 \\ +3 \\ \hline \end{array}$$

$$\begin{array}{r} 4 \\ +6 \\ \hline \end{array}$$

$$\begin{array}{r} 4 \\ +3 \\ \hline \end{array}$$

$$\begin{array}{r} 5 \\ +5 \\ \hline \end{array}$$

$$\begin{array}{r} 3 \\ +3 \\ \hline \end{array}$$

$$\begin{array}{r} 2 \\ +2 \\ \hline \end{array}$$


Split into 2 halves.



Split into 4 quarters.



The corn on the cob is _____ paperclips long.



Morning Work

Name: _____
First Name Last Name

Date: _____
Month Date , Year

Subtract these problems.

$$10 - 8 = \underline{\hspace{2cm}}$$

$$12 - 6 = \underline{\hspace{2cm}}$$

$$11 - 7 = \underline{\hspace{2cm}}$$

$$9 - 8 = \underline{\hspace{2cm}}$$

$$9 - 9 = \underline{\hspace{2cm}}$$

Circle the root words.

farmer

smallest

ticking

harder

sleeping

falling

Write 3 words in each word family.

-ot

-og

What do these clocks show?



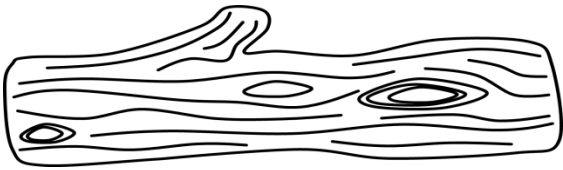


Morning Work

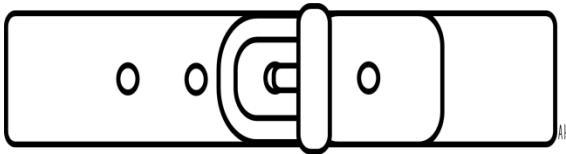
Name: _____
First Name Last Name

Date: _____
Month Date , Year

Which is longer?



Fill in the missing blend.



be _____

Circle the real words.
Cross out nonsense words.

start

shock

sheet

kint

punb

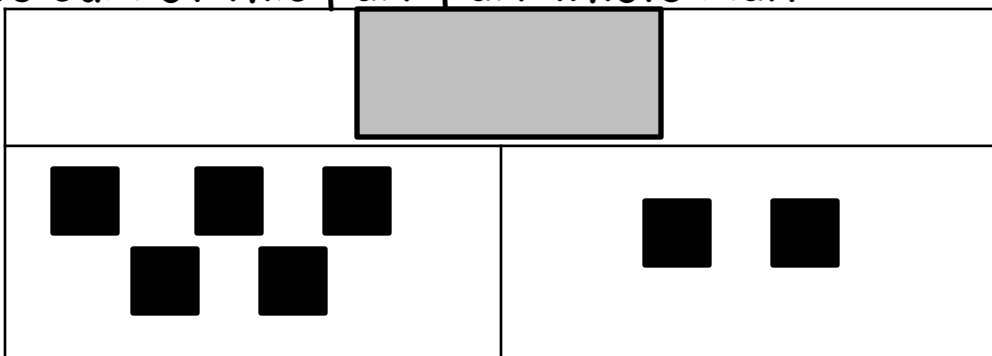
frut

plum

fath

jush

Find the sum of this part-part whole mat.



Morning Work

Name: _____
First Name Last Name

Date: _____
Month Date , Year

Katie had 10 books, but her sister took away 7 of them. How many books does Katie have left?

_____ - _____ = _____
_____ boxes

Write 3 words in each word family.

-ick	-ing

Put these words in ABC Order.

1.
2.
3.
4.
5.

Word Bank

ball jungle goat
duck frog

Write the turn-around fact.

$$5 + 2 = 7$$
$$\underline{\quad\quad} + \underline{\quad\quad} = 7$$

Morning Work

Name: _____
First Name Last Name

Date: _____
Month Date , Year

Real Words	Nonsense Words

Word Bank

pluck time trug blick flax truck

Subtract these problems.

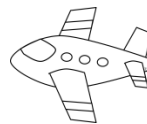
$$8-6=$$

$$7-2=$$

$$9-8=$$

$$11-8=$$

Fill in the missing sounds.



___e___

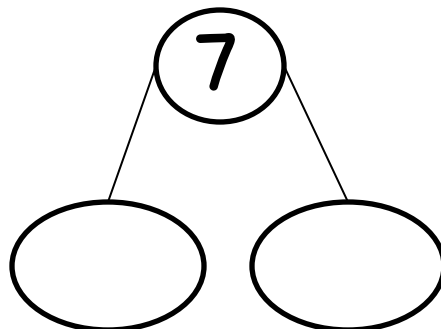
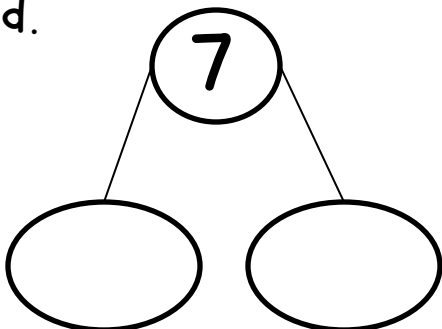


___d___



___o___

Show two different ways to show 7 with a number bond.



Morning Work


Name: _____
First Name Last Name

Date: _____
Month Date , Year

Circle the correct spelling of the compound words.

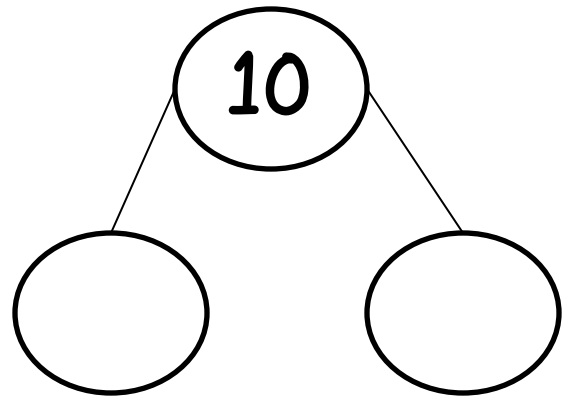


packback
backpack
toothbrush



birdhouse
pastetooth
toothbrush

Make this number bond true.



What do these clocks show?





Circle the letters that need a CAPITAL.

i like a T.V. show. it
is on the disney
channel. it is called
good luck charlie.

Morning Work

Name: _____
First Name Last Name

Date: _____
Month Date , Year

Draw a picture to help.

The butterfly has four spots on one wing and three spots on the other. How many spots did the butterfly have in all?

_____ + _____ = _____

_____ spots

Write 4 words in the -ug word family.


1. _____

2. _____

3. _____

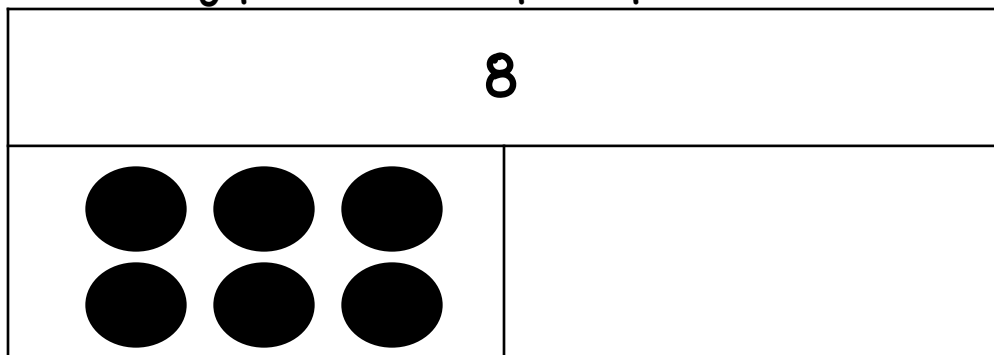
4. _____

Fill in the blend.



		a	p	e	s
--	--	---	---	---	---

Find the missing part of this part-part whole mat.



Morning Work

Name: _____
First Name Last Name

Date: _____
Month Date , Year

Write the turn-around fact.

$$6 + 3 = 9$$

$$\underline{\quad\quad} + \underline{\quad\quad} = 9$$

Circle the root words.

helper

seeing

sweeter

sweetest

standing

reader

Put the words in ABC Order.

1.

2.

3.

4.

5.

Word Bank

astronaut zebra

mouse hammer giraffe

Write the number word.

12

19

15

Morning Work

Name: _____
First Name Last Name

Date: _____
Month Date , Year

Add or subtract these problems.


$11 - 8 = \underline{\hspace{2cm}}$

$4 + 7 = \underline{\hspace{2cm}}$


$6 + 6 = \underline{\hspace{2cm}}$

$6 + 7 = \underline{\hspace{2cm}}$

Circle the correct compound word.



goldfish
golden
horseshoe



flower
sunflower
snowman

Fix this list by putting it in ABC Order.

bird
bug
beach
ball
bop

1.

2.

3.

4.

5.

Draw a picture to help.

My mom got 5 Cokes from the store and 4 Sprites from the store. How many sodas did my mom buy in all?

_____ + _____ = _____
_____ drinks

Morning Work

Name: _____
First Name Last Name

Date: _____
Month Date , Year

Add these problems.

$$12 + 3 = \underline{\hspace{2cm}}$$

$$14 + 1 = \underline{\hspace{2cm}}$$

$$13 + 5 = \underline{\hspace{2cm}}$$

$$17 + 1 = \underline{\hspace{2cm}}$$

$$4 + 7 = \underline{\hspace{2cm}}$$

Fill in the missing blend.



bi _____

Show these problems.

$$\begin{array}{r} 2 \\ +3 \\ \hline \end{array}$$

$$\begin{array}{r} 6 \\ +1 \\ \hline \end{array}$$

$$\begin{array}{r} 4 \\ +2 \\ \hline \end{array}$$

$$\begin{array}{r} 7 \\ +2 \\ \hline \end{array}$$

$$\begin{array}{r} 6 \\ +2 \\ \hline \end{array}$$

$$\begin{array}{r} 9 \\ +0 \\ \hline \end{array}$$

What do these clocks show?



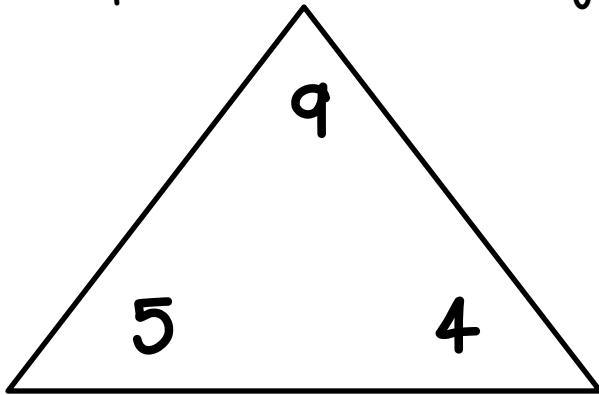


Morning Work

Name: _____
First Name Last Name

Date: _____
Month Date , Year

Complete this fact family.



$$\begin{array}{rcl} \underline{\quad} & + & \underline{\quad} = \underline{\quad} \\ \underline{\quad} & + & \underline{\quad} = \underline{\quad} \\ \underline{\quad} & - & \underline{\quad} = \underline{\quad} \\ \underline{\quad} & - & \underline{\quad} = \underline{\quad} \end{array}$$

Circle the real words.
Cross out nonsense words.


rent tont brith
brink plot lave
wath nest
trick

Which two words make up
this compound word?



cup	bath	cake	tub
bird	base	house	ball

Find the missing part to this part-part whole mat.




Morning Work

Name: _____
First Name Last Name

Date: _____
Month Date , Year

Write a sentence about the picture.



Fix this list by putting it in ABC Order.

cell
cup
circle
cat
cot

1.

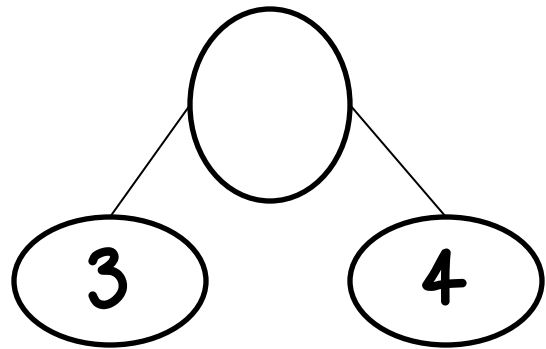
2.

3.

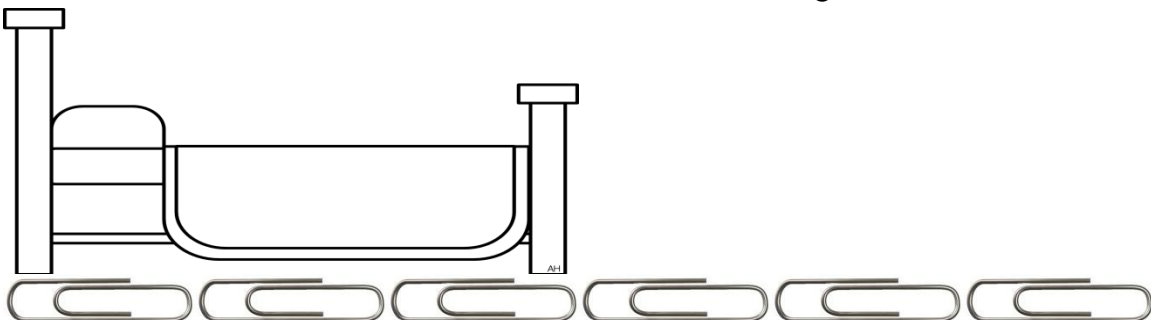
4.

5.

What is the sum of this number bond?



The bed is _____ paperclips long.



Morning Work

Name: _____
First Name Last Name

Date: _____
Month Date , Year

Add the punctuation.

I see him_

Do you like it_

No way_

Favorite Animals

Bunny

20

Owl

23

Frog

13

What color is the least favorite?

Write the turn-around fact.

$$1 + 4 = 5$$

$$\underline{\quad} + \underline{\quad} = 5$$

Write 5 words in the -all word family.

-all

1. _____

2. _____

3. _____

4. _____

5. _____

Morning Work

Name: _____
First Name Last Name

Date: _____
Month Date , Year

Draw a picture to help.

I had 5 cars in my toy box. 4 cars were lost by my sister. How many cars are left?

_____ - _____ = _____
_____ cars

Circle real words red.
Circle nonsense words blue.

from frim share
shar print
vesh clock
pants shap

Subtract these problems.

$$20-5=$$

$$20-4=$$

$$20-3=$$

Write a sentence for the picture.



Morning Work

Name: _____
First Name Last Name

Date: _____
Month Date , Year

Add or subtract these problems.

$$11 + 5 = \underline{\hspace{2cm}}$$

$$14 - 8 = \underline{\hspace{2cm}}$$

$$12 + 7 = \underline{\hspace{2cm}}$$

$$11 + 6 = \underline{\hspace{2cm}}$$

$$12 - 7 = \underline{\hspace{2cm}}$$

Put these words in ABC order

1. _____

2. _____

3. _____


4. _____

5. _____

Word Bank

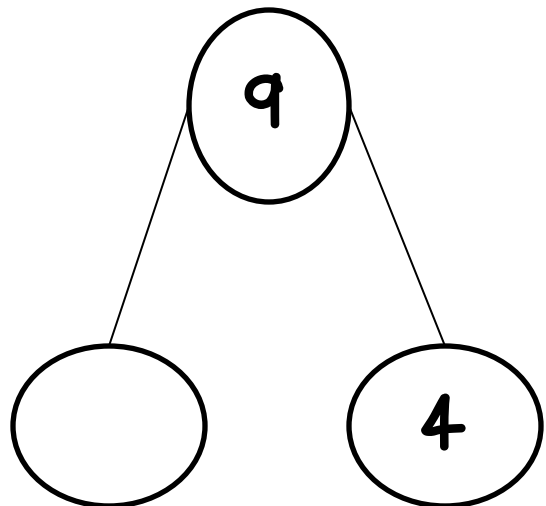
hippo duck
zebra mouse rat

Fill in the missing blend.



bu _____

What addend is missing from the number bond?


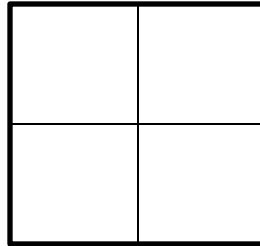




Morning Work

Name: _____
First Name Last Name

Date: _____
Month Date , Year

Color the squares with 2 halves purple.
Color the squares with 4 quarters yellow.



Circle the root words.

helping

hotter

bigger

colder

smallest

thinking

Circle the real words yellow.

Circle the nonsense words blue.

brick

nest

brem

pell

frog

glip

flag

fлом

flip

Draw a picture to help.

Jack took 6 pens to the library. His friend John took 5 pens to the library. How many pens in all?

_____ + _____ = _____

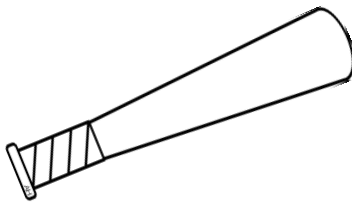
_____ pens

Morning Work


Name: _____
First Name Last Name

Date: _____
Month Date , Year

Circle the correct word family.



-at
-et



-ot
-og

What do these clocks show?





Write the turn-around fact.

$$5 + 4 = 9$$

$$\underline{\hspace{2cm}} + \underline{\hspace{2cm}} = 9$$

Solve these problems.

$$\begin{array}{r} 5 \\ +6 \\ \hline \end{array} \quad \begin{array}{r} 10 \\ +2 \\ \hline \end{array} \quad \begin{array}{r} 3 \\ +6 \\ \hline \end{array}$$

$$\begin{array}{r} 4 \\ +7 \\ \hline \end{array} \quad \begin{array}{r} 2 \\ +8 \\ \hline \end{array} \quad \begin{array}{r} 3 \\ +4 \\ \hline \end{array}$$

Morning Work

Name: _____
First Name Last Name

Date: _____
Month Date , Year

Real Words	Nonsense Words

Word Bank

play brat plom brub glug prep

Write the uppercase
alphabet.

A
z

Subtract these facts.

$$14-6=$$

$$12-7=$$

$$11-7=$$

$$16-6=$$

Are these math facts true or false?

$$10+5=11$$

True

False

$$9-3=6$$

True

False

$$3+6=2$$

True

False

$$5-1=4$$

True


False

Morning Work

Name: _____
First Name Last Name

Date: _____
Month Date , Year

Which 2 words make up this compound word?



puff

bag

book

cup

corn

cake

food

pop

Put these words in ABC Order.

1.

2.

3.

4.

5.

Word Bank

music art gym
library computers

What is missing?

6



What do these clocks show?





Morning Work

Name: _____
First Name Last Name

Date: _____
Month Date , Year

Write 2 sentences for the picture.



Write the turn-around fact.

$$6 = 4 + 2$$

$$6 = \underline{\quad\quad} + \underline{\quad\quad}$$

Fill in the punctuation.

Do you see me_

I can not do it_

Help_ I'm stuck_

Solve these addition and subtraction facts.

$$19 - 5 = \underline{\quad\quad}$$

$$12 + 3 = \underline{\quad\quad}$$

$$14 - 7 = \underline{\quad\quad}$$

$$17 + 1 = \underline{\quad\quad}$$

$$15 - 4 = \underline{\quad\quad}$$

$$12 + 5 = \underline{\quad\quad}$$

Morning Work

Name: _____
First Name Last Name

Date: _____
Month Date , Year

Write the number words.

17	
13	
11	

Write 5 words in the -ot word family.

-ot

1.

2.

3.

4.

5.

Add 10 to each of these numbers.

$9 + 10 =$ _____


$10 + 10 =$ _____

$3 + 10 =$ _____

$13 + 10 =$ _____

$17 + 10 =$ _____

Fill in the missing blend.



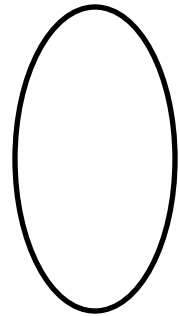


wd _____

Morning Work

Name: _____
First Name Last Name

Date: _____
Month Date , Year

Show how to split these shapes in half.



Subtract 10 from these numbers.

$$12 - 10 = \underline{\hspace{2cm}}$$

$$15 - 10 = \underline{\hspace{2cm}}$$


$$19 - 10 = \underline{\hspace{2cm}}$$

Fill in the missing blend.



		o	c	k
--	--	---	---	---

Write 2 sentences.




Morning Work

Name: _____
First Name Last Name

Date: _____
Month Date , Year

What do these clocks show?





Solve the vertical math problems.

$$\begin{array}{r} 2 \\ +3 \\ \hline \end{array} \quad \begin{array}{r} 1 \\ +2 \\ \hline \end{array} \quad \begin{array}{r} 5 \\ +6 \\ \hline \end{array}$$

$$\begin{array}{r} 3 \\ +4 \\ \hline \end{array} \quad \begin{array}{r} 6 \\ +7 \\ \hline \end{array} \quad \begin{array}{r} 3 \\ +4 \\ \hline \end{array}$$

Put the words in ABC Order.

1. _____

2. _____

3. _____

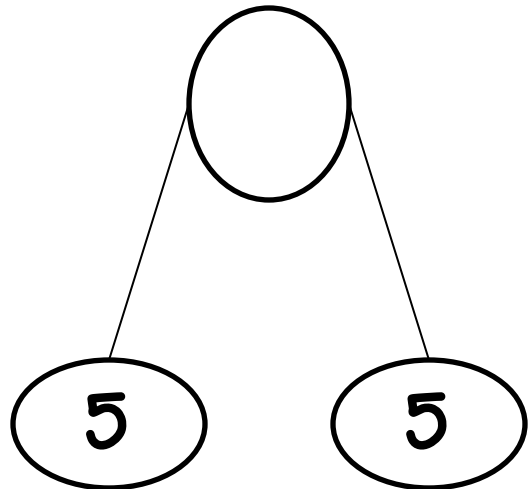
4. _____

5. _____

Word Bank

winter spring seasons
fall summer

What is the sum of the number bond?



Morning Work

Name: _____
First Name Last Name


Date: _____
Month Date , Year

The love bug is _____ cubes long.

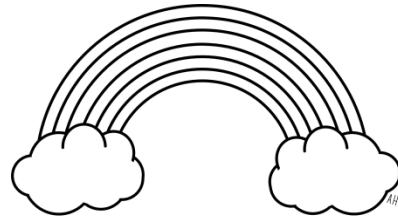


What is missing?

10



Find the 2 words in the compound word.



bow

cloud

rain

sun

shine

sky

red

blue

Write the days of the week.

W

S

T

M

F

T

S

Morning Work

Name: _____
First Name Last Name

Date: _____
Month Date , Year

Write the turn-around fact.

$$8 = 2 + 6$$

$$8 = \underline{\quad\quad} + \underline{\quad\quad}$$

Put these words in ABC Order.

book
pencil
crayon
scissors
glue

1.

2.

3.

4.


5.

Match these compound words to the pictures.

bookshelf




backpack



popcorn



Show how to split these shapes into quarters.

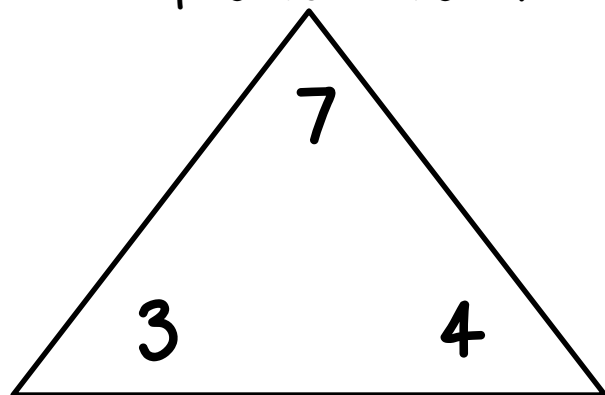


Morning Work

Name: _____
First Name Last Name

Date: _____
Month Date , Year

Find 4 problems for this fact family.



$$\underline{\quad} + \underline{\quad} = \underline{\quad}$$

$$\underline{\quad} + \underline{\quad} = \underline{\quad}$$

$$\underline{\quad} - \underline{\quad} = \underline{\quad}$$

$$\underline{\quad} - \underline{\quad} = \underline{\quad}$$

Write 4 words in the -ock word family.

-ock

1.

2.

3.

4.

Circle the root words.

smallest

hottest

largest

sweeter

bigger

neater

Solve these near doubles.

$$6+7= \underline{\quad}$$

$$8+9= \underline{\quad}$$

$$3+4= \underline{\quad}$$

$$2+3= \underline{\quad}$$

$$5+4= \underline{\quad}$$

$$7+8= \underline{\quad}$$

Morning Work

Name: _____
First Name Last Name

Date: _____
Month Date , Year

Write the answer to these doubles addition facts.

$$2+2=$$

$$10+10=$$

$$9+9=$$

$$7+7=$$

$$4+4=$$

Solve these problems.

$$\begin{array}{r} 7 \\ +3 \\ \hline \end{array}$$

$$\begin{array}{r} 6 \\ +3 \\ \hline \end{array}$$

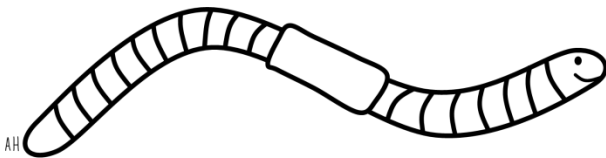
$$\begin{array}{r} 5 \\ +3 \\ \hline \end{array}$$

$$\begin{array}{r} 3 \\ +4 \\ \hline \end{array}$$

$$\begin{array}{r} 4 \\ +3 \\ \hline \end{array}$$

$$\begin{array}{r} 5 \\ +4 \\ \hline \end{array}$$

Fill in the missing blend.



WO _____

Write the number words.

18

16

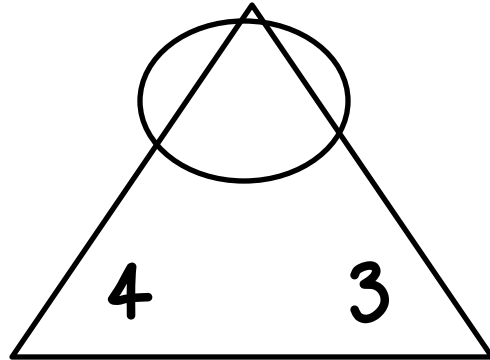
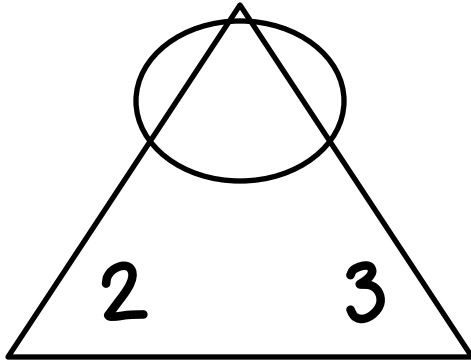
14

Morning Work

Name: _____
First Name Last Name

Date: _____
Month Date , Year

Complete the sum of the fact families.



Put these words into ABC order.

zip
zoo
zap
zebra

1.
2.
3.
4.

Are these math facts true or false?

$11+1=15$ True or False?

$12+2=14$ True or False?

$10+5=17$ True or False?

What kind of pet do you own?

X		
X		X
X	X	X
dog	cat	fish

What pet has the least amount of owners?

What pet has the most owners?

Morning Work

Name: _____
First Name Last Name

Date: _____
Month Date , Year

Put the words in ABC order.

goal
shoe
rug
card
quilt

1.

2.

3.

4.

5.

Favorite Season

Winter

35

Summer

33

Fall

31

What is the most favorite season?

Circle the real words red.
Circle nonsense words yellow.

breeze

blaze

brip

drop

plap

graf

brum

grip

froze

What do these clocks show?



Morning Work

Name: _____
First Name Last Name

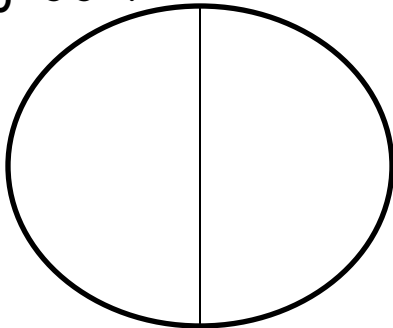
Date: _____
Month Date , Year

Real Words	Nonsense Words

Word Bank

gret treb grin twirl broke swirl

Color one half of the circle blue and the other half green.



Circle the correct family.

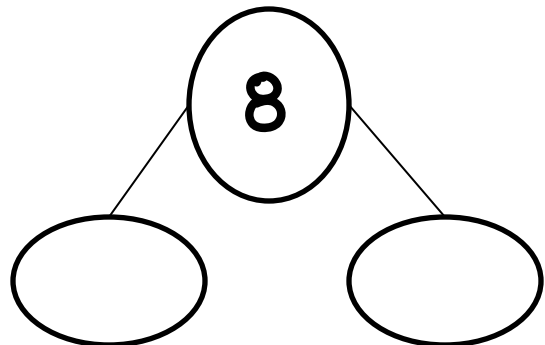
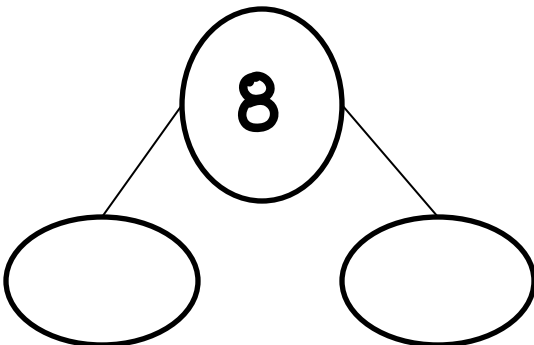


-ug
-ut



-ock
-ick

Show two different number bonds for 8.




Morning Work

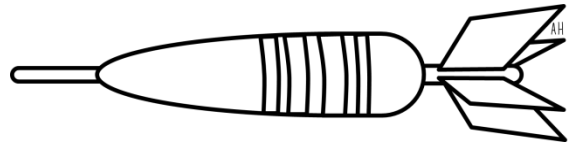
Name: _____
First Name Last Name

Date: _____
Month Date , Year

What is missing?

10	
	

Fill in the missing blend.



da _____

Solve these vertical math problems.

$\begin{array}{r} 10 \\ +1 \\ \hline \end{array}$	$\begin{array}{r} 10 \\ +7 \\ \hline \end{array}$	$\begin{array}{r} 10 \\ +4 \\ \hline \end{array}$
$\begin{array}{r} 10 \\ +2 \\ \hline \end{array}$	$\begin{array}{r} 10 \\ +5 \\ \hline \end{array}$	$\begin{array}{r} 10 \\ +3 \\ \hline \end{array}$

Solve these problems.

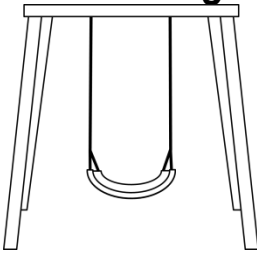
$14+3=$	_____
$10-8=$	_____
$14-7=$	_____
$18+1=$	_____
$13-6=$	_____

Morning Work

Name: _____
First Name Last Name

Date: _____
Month Date , Year

Fill in the missing blends.



		i	n	g
--	--	---	---	---



		i	n	c	e
--	--	---	---	---	---

Fix the capitals.

i do not see
you. can you
see ms. smith?

Answer these math problems.

$$10 + 7 = \underline{\hspace{2cm}}$$

$$10 + 6 = \underline{\hspace{2cm}}$$

$$10 + 9 = \underline{\hspace{2cm}}$$

Write 2 words from each word family.


-at	-et	-ot

Morning Work

Name: _____
First Name Last Name

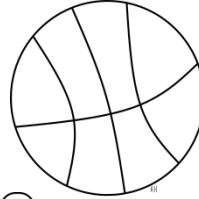
Date: _____
Month Date , Year

What time do these clocks show?

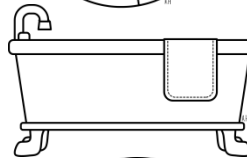





Match the compound words to the pictures.



bathtub



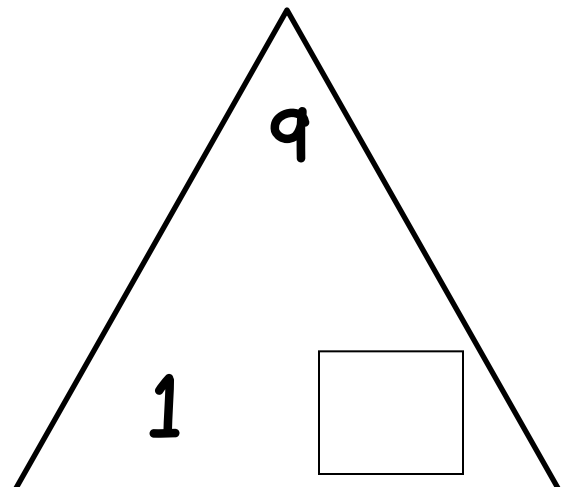
basketball



baseball

Draw two pictures from the -ug word family.

Write the missing part to this fact family.

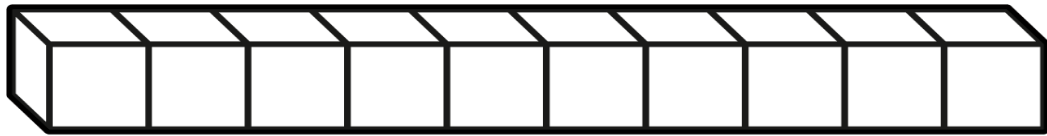



Morning Work

Name: _____
First Name Last Name

Date: _____
Month Date , Year

The bat is _____ cubes long.



Fix the capital letters.

my sister's name
is jess. she likes
to go to disney
world.

Write the turn-around
fact.

$$2 + 7 = 9$$
$$9 = \underline{\quad\quad} + \underline{\quad\quad}$$

Real Words	Nonsense Words

Word Bank

grip bird glim bath shup chem

Morning Work

Name: _____

First Name

Last Name


Date: _____

Month

Date

Year

What is missing?

9	
	

Fix the list and put the words in ABC order.

star
ship
seat
sink
soap

1.

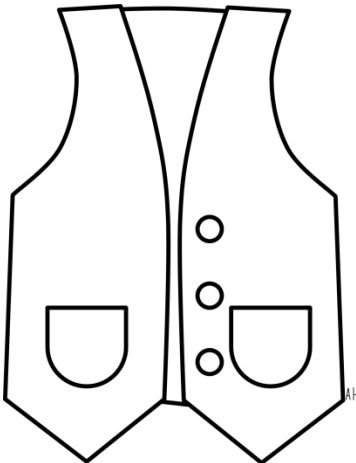
2.

3.

4.

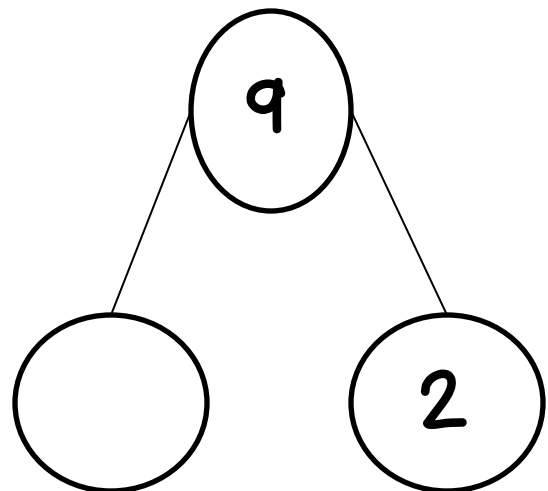
5.

Fill in the missing blend.



ve _____

What is the missing addend in this number bond?




Morning Work

Name: _____
First Name Last Name

Date: _____
Month Date , Year


Circle the compound word for each picture.



sunflower
flowersun

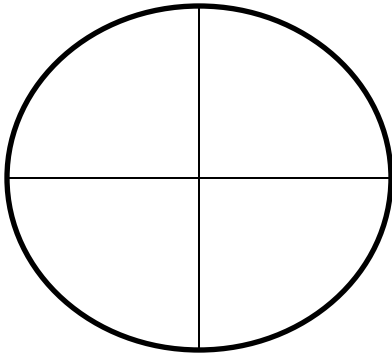


cornpop
popcorn



flydraon
dragonfly

Color the quarters red,
green, blue, and yellow.



Write 4 words in the -et
word family.

-et

1. _____

2. _____

3. _____

4. _____

Solve these math problems.

$$\begin{array}{r} 5 \\ +3 \\ \hline \end{array}$$

$$\begin{array}{r} 4 \\ +3 \\ \hline \end{array}$$

$$\begin{array}{r} 8 \\ +3 \\ \hline \end{array}$$

$$\begin{array}{r} 1 \\ +3 \\ \hline \end{array}$$

$$\begin{array}{r} 6 \\ +3 \\ \hline \end{array}$$

Morning Work

Name: _____
First Name Last Name

Date: _____
Month Date , Year

Hair Color	
Red	3
Blonde	7
Brunette	10

What group had the least?

What time do these clocks show?





Solve these math problems.

$$\begin{array}{r} 11 \\ +2 \\ \hline \end{array}$$

$$\begin{array}{r} 12 \\ +3 \\ \hline \end{array}$$

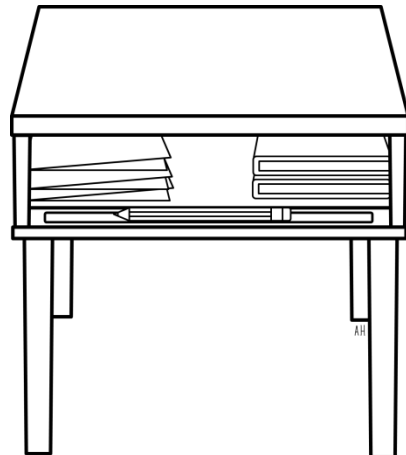
$$\begin{array}{r} 14 \\ +1 \\ \hline \end{array}$$

$$\begin{array}{r} 11 \\ +5 \\ \hline \end{array}$$

$$\begin{array}{r} 10 \\ +7 \\ \hline \end{array}$$

$$\begin{array}{r} 12 \\ +4 \\ \hline \end{array}$$

Fill in the missing blend.



de _____

Homework

Option:

The next 45 pages
are the same
work pages as the
previous 45,
however these are
labeled as Homework.

Homework

Name: _____
First Name Last Name

Date: _____
Month Date , Year

What time do these clocks show?





Solve these vertical math problems.

$$\begin{array}{r} 5 \\ +7 \\ \hline \end{array}$$

$$\begin{array}{r} 6 \\ +6 \\ \hline \end{array}$$

$$\begin{array}{r} 3 \\ +2 \\ \hline \end{array}$$

$$\begin{array}{r} 4 \\ +4 \\ \hline \end{array}$$

$$\begin{array}{r} 7 \\ +3 \\ \hline \end{array}$$

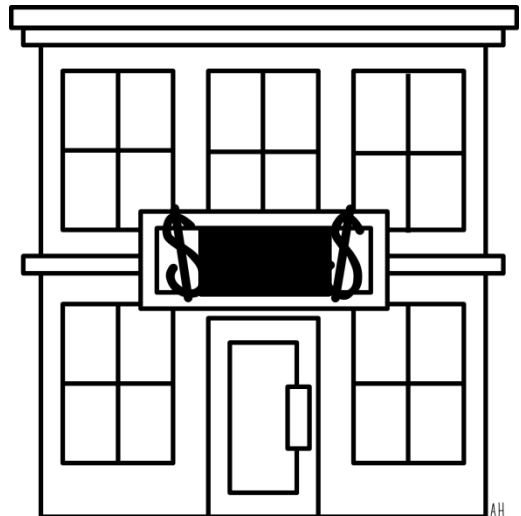
$$\begin{array}{r} 8 \\ +3 \\ \hline \end{array}$$

Favorite Colors

Red	19
Green	17
Blue	16

What color is the most favorite?

Fill in the missing blend.



ba _____

AH

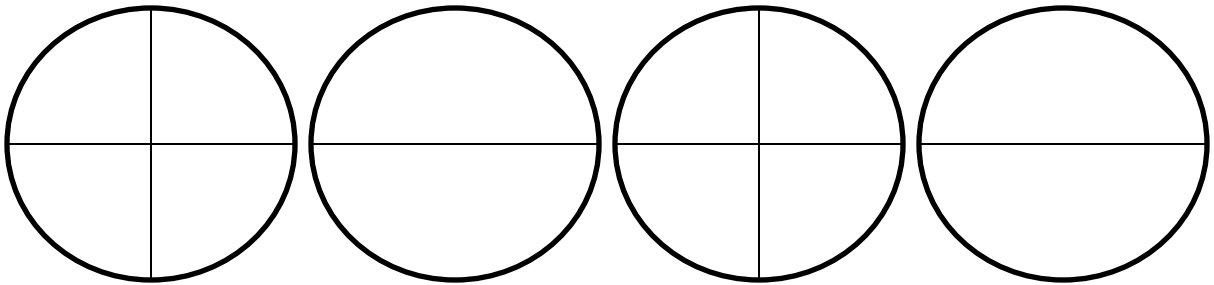
Homework

Name: _____
First Name Last Name

Date: _____
Month Date , Year

Color the circle that shows 2 halves RED.

Circle that circle that shows 4 quarters BLUE.



Write 4 words in the -at word family.

-at

1.

2.

3.

4.

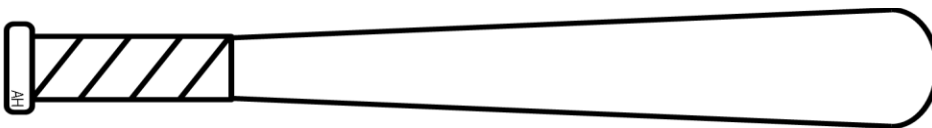
Circle the root words.

banker teacher

biggest working

shouting harder

The bat is _____ paperclips long.



Homework

Name: _____
First Name Last Name

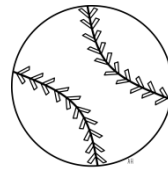
Date: _____
Month Date , Year

Jill had 3 boxes. John had 5 boxes. How many boxes did Jill and John have together?

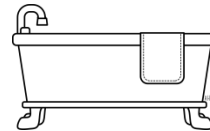
_____ + _____ = _____

_____ boxes

Circle the correct compound word.



baseball or birdhouse?



basketball or bathtub?

Put the words in ABC Order.

1.

2.

3.

4.

5.

Word Bank

apple dog eagle
bee cat

What do these clocks show?



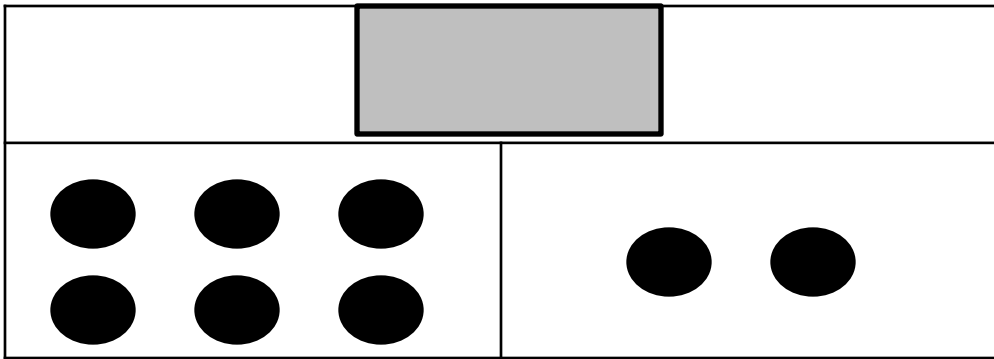


Homework

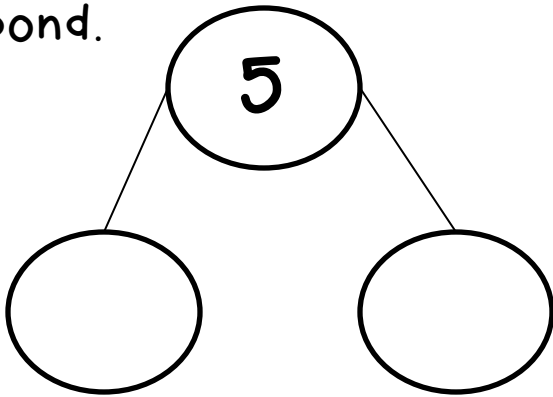
Name: _____
First Name Last Name

Date: _____
Month Date , Year


Find the sum for this part-part whole mat.



Make a number addition bond.



Circle the pictures with a blend at the beginning.



Real Words

Nonsense Words

Word Bank:

cat jib peg mig pig hat ham vib

Homework

Name: _____
First Name Last Name

Date: _____
Month Date , Year

Write 5 words in the -et word family.

-et

1. _____


2. _____

3. _____


4. _____

5. _____

Split into 2 halves.




Split into 4 quarters.



What do these clocks show?





Circle the correct compound word.



berrystraw or strawberry?



rainbow or rainow?

Homework

Name: _____
First Name Last Name

Date: _____
Month Date , Year

Solve the addition facts.

$$5+4=$$

$$3+6=$$

$$4+7=$$

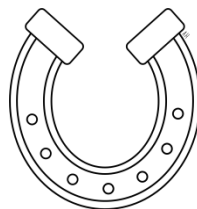
$$5+8=$$

$$3+9=$$

Circle the correct compound word.




horseshoe
sunflower
snowman



rainbow
horseshoe
hotdog

Fill in the missing blend.



bea_____

What do these clocks show?





Homework

Name: _____
First Name Last Name

Date: _____
Month Date , Year

Put these words into the correct ABC order.

water
cloud
rain
puddle
drop

1.

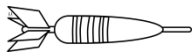
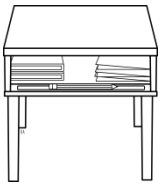
2.

3.

4.

5.

Circle words that have an ending blend.



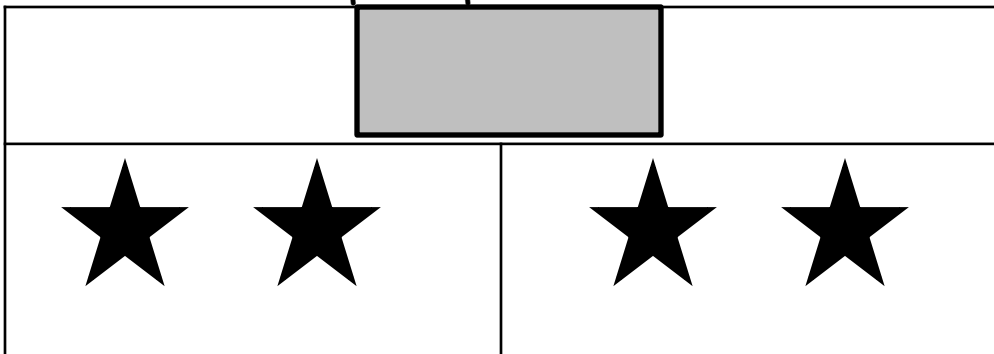
Add these problems.

$$11 + 2 = \underline{\hspace{2cm}}$$

$$3 + 9 = \underline{\hspace{2cm}}$$

$$5 + 7 = \underline{\hspace{2cm}}$$

Find the sum for this part-part whole mat.



Homework

Name: _____
First Name Last Name

Date: _____
Month Date , Year


Circle the real words.
Cross out nonsense words.


cart tank
kite toch
shib lave
star mich

Write the turn-around
fact.

$$4 + 3 = 7$$
$$\underline{\quad\quad} + \underline{\quad\quad} = 7$$

What do these clocks
show?





Write 5 words in the -ig
word family.

-ig

1. _____

2. _____

3. _____

4. _____

5. _____

Homework

Name: _____
First Name Last Name

Date: _____
Month Date , Year

Real Words	Nonsense Words

Word Bank

frit track punt trip quim greb

Solve these problems.

$$\begin{array}{r} 9 \\ +3 \\ \hline \end{array}$$

$$\begin{array}{r} 4 \\ +6 \\ \hline \end{array}$$

$$\begin{array}{r} 4 \\ +3 \\ \hline \end{array}$$

$$\begin{array}{r} 5 \\ +5 \\ \hline \end{array}$$

$$\begin{array}{r} 3 \\ +3 \\ \hline \end{array}$$

$$\begin{array}{r} 2 \\ +2 \\ \hline \end{array}$$


Split into 2 halves.



Split into 4 quarters.



The corn on the cob is _____ paperclips long.



Homework

Name: _____
First Name Last Name

Date: _____, _____
Month Date Year

Subtract these problems.

$$10 - 8 = \underline{\hspace{2cm}}$$

$$12 - 6 = \underline{\hspace{2cm}}$$

$$11 - 7 = \underline{\hspace{2cm}}$$

$$9 - 8 = \underline{\hspace{2cm}}$$

$$9 - 9 = \underline{\hspace{2cm}}$$

Circle the root words.

farmer

smallest

ticking

harder

sleeping

falling

Write 3 words in each word family.

-ot

-og

What do these clocks show?



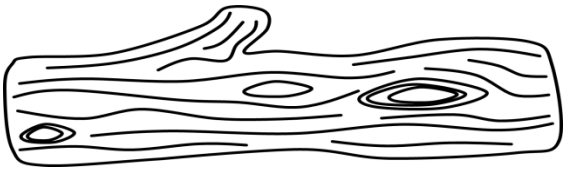


Homework

Name: _____
First Name Last Name

Date: _____
Month Date , Year

Which is longer?



Fill in the missing blend.

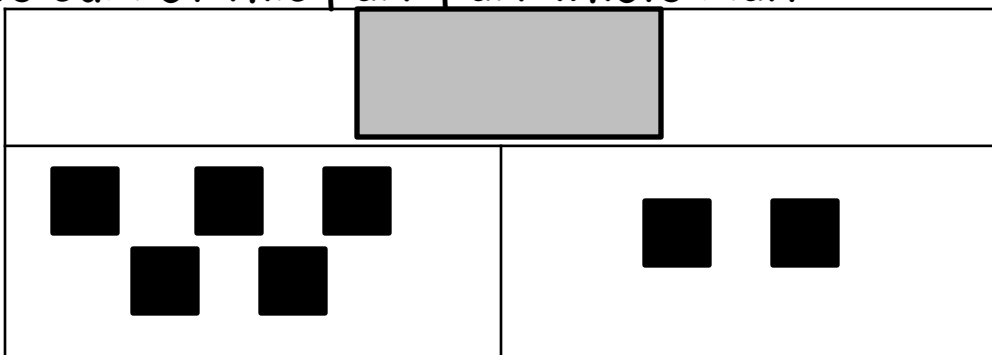


be _____

Circle the real words.
Cross out nonsense words.

start shock
kint punb sheet
frut plum
fath jush

Find the sum of this part-part whole mat.



Homework

Name: _____
First Name Last Name

Date: _____
Month Date , Year

Katie had 10 books, but her sister took away 7 of them. How many books does Katie have left?

_____ - _____ = _____
_____ boxes

Write 3 words in each word family.

-ick	-ing

Put these words in ABC Order.

1.
2.
3.
4.
5.

Word Bank

ball jungle goat
duck frog

Write the turn-around fact.

$$5 + 2 = 7$$
$$\underline{\hspace{2cm}} + \underline{\hspace{2cm}} = 7$$

Homework

Name: _____
First Name Last Name

Date: _____
Month Date , Year

Real Words	Nonsense Words

Word Bank

pluck time trug blick flax truck

Subtract these problems.

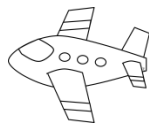
$$8-6=$$

$$7-2=$$

$$9-8=$$

$$11-8=$$

Fill in the missing sounds.



___ e ___

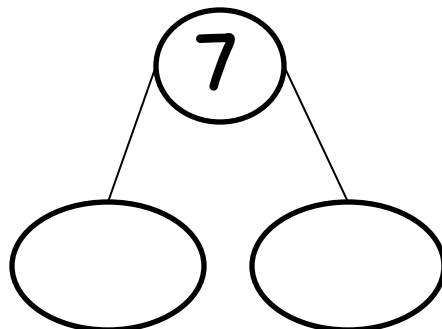
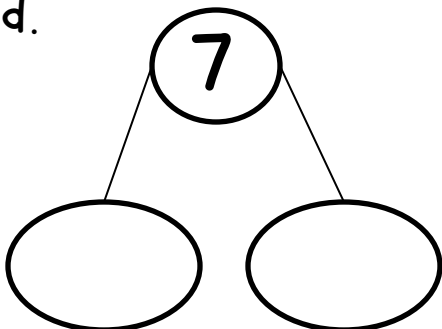


___ d ___



___ o ___

Show two different ways to show 7 with a number bond.



Homework


Name: _____
First Name Last Name

Date: _____
Month Date , Year

Circle the correct spelling of the compound words.

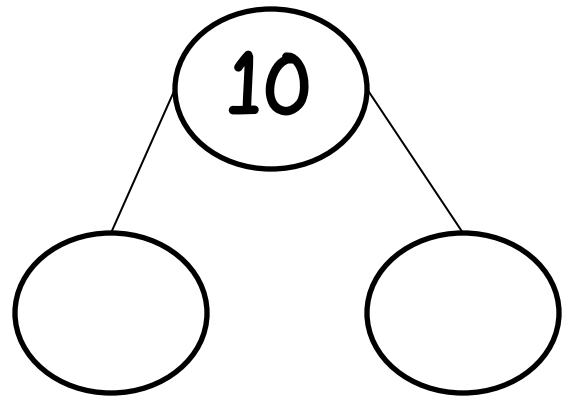


packback
backpack
toothbrush



birdhouse
pastetooth
toothbrush

Make this number bond true.



What do these clocks show?





Circle the letters that need a CAPITAL.

i like a T.V. show. it
is on the disney
channel. it is called
good luck charlie.

Homework

Name: _____
First Name Last Name

Date: _____
Month Date , Year

Draw a picture to help.

The butterfly has four spots on one wing and three spots on the other. How many spots did the butterfly have in all?

_____ + _____ = _____

_____ spots

Write 4 words in the -ug word family.


1. _____

2. _____

3. _____

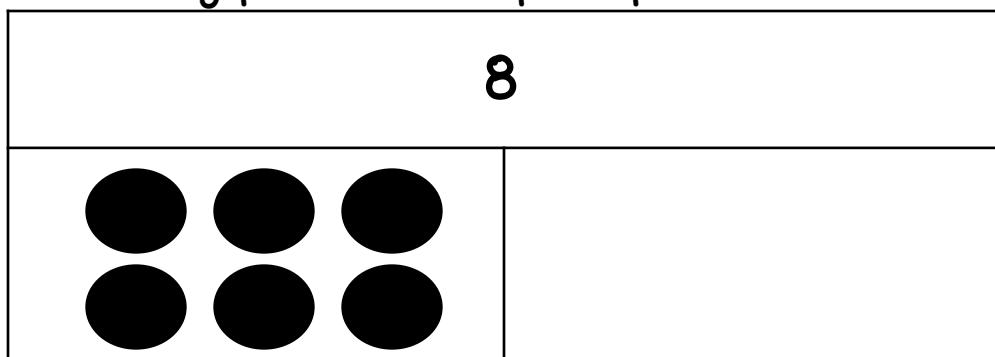
4. _____

Fill in the blend.



		a	p	e	s
--	--	---	---	---	---

Find the missing part of this part-part whole mat.



Homework

Name: _____
First Name Last Name

Date: _____
Month Date , Year

Write the turn-around fact.

$$6 + 3 = 9$$

$$\underline{\quad\quad} + \underline{\quad\quad} = 9$$

Circle the root words.

helper

seeing

sweeter

sweetest

standing

reader

Put the words in ABC Order.

1.

2.

3.

4.

5.

Word Bank

astronaut zebra

mouse hammer giraffe

Write the number word.

12

19

15

Homework

Name: _____
First Name Last Name

Date: _____
Month Date , Year

Add or subtract these problems.


$$11 - 8 = \underline{\hspace{2cm}}$$

$$4 + 7 = \underline{\hspace{2cm}}$$


$$6 + 6 = \underline{\hspace{2cm}}$$

$$6 + 7 = \underline{\hspace{2cm}}$$

Circle the correct compound word.



goldfish
golden
horseshoe



flower
sunflower
snowman

Fix this list by putting it in ABC Order.

bird
bug
beach
ball
bop

1.

2.

3.

4.

5.

Draw a picture to help.

My mom got 5 Cokes from the store and 4 Sprites from the store. How many sodas did my mom buy in all?

_____ + _____ = _____
_____ drinks

Homework

Name: _____
First Name Last Name

Date: _____
Month Date , Year

Add these problems.

$$12 + 3 = \underline{\hspace{2cm}}$$

$$14 + 1 = \underline{\hspace{2cm}}$$

$$13 + 5 = \underline{\hspace{2cm}}$$

$$17 + 1 = \underline{\hspace{2cm}}$$

$$4 + 7 = \underline{\hspace{2cm}}$$

Fill in the missing blend.



bi _____

Show these problems.

$$\begin{array}{r} 2 \\ +3 \\ \hline \end{array}$$

$$\begin{array}{r} 6 \\ +1 \\ \hline \end{array}$$

$$\begin{array}{r} 4 \\ +2 \\ \hline \end{array}$$

$$\begin{array}{r} 7 \\ +2 \\ \hline \end{array}$$

$$\begin{array}{r} 6 \\ +2 \\ \hline \end{array}$$

$$\begin{array}{r} 9 \\ +0 \\ \hline \end{array}$$

What do these clocks show?





Homework

Name: _____

First Name

Last Name

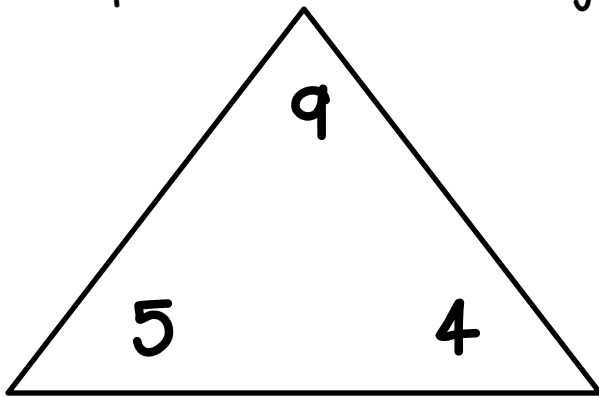
Date: _____

Month

Date

Year

Complete this fact family.


$$\underline{\hspace{2cm}} + \underline{\hspace{2cm}} = \underline{\hspace{2cm}}$$
$$\underline{\hspace{2cm}} + \underline{\hspace{2cm}} = \underline{\hspace{2cm}}$$
$$\frac{1}{2} \times \frac{1}{2} = \frac{1}{4}$$

Circle the real words.
Cross out nonsense words.

rent tont brith
brink plot lave
trick wath nest


Which two words make up
this compound word?



cup	bath	cake	tub
bird	base	house	ball

Find the missing part to this part-part whole mat.

5




Homework

Name: _____
First Name Last Name

Date: _____
Month Date , Year

Write a sentence about the picture.



Fix this list by putting it in ABC Order.

cell
cup
circle
cat
cot

1.

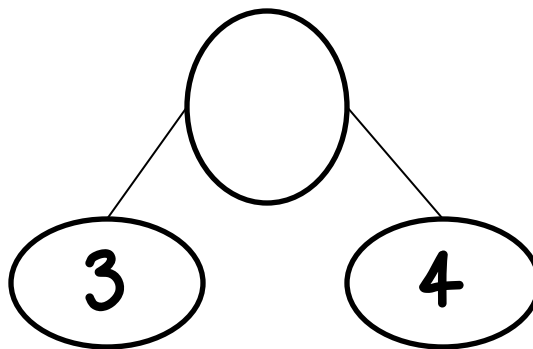
2.

3.

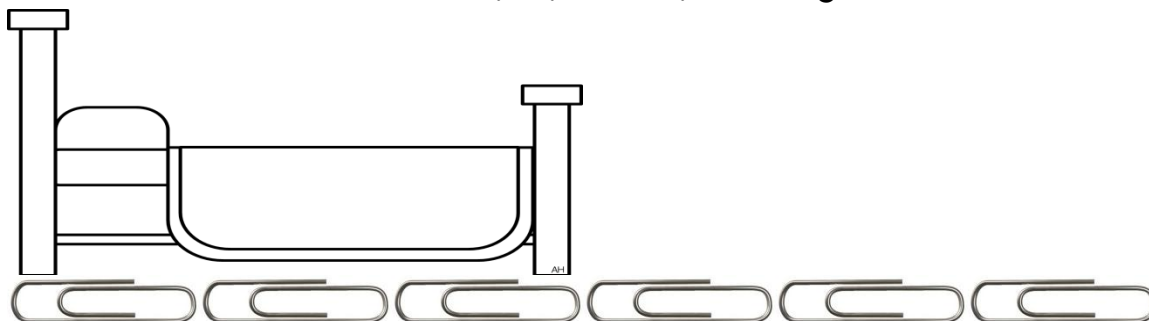
4.

5.

What is the sum of this number bond?



The bed is _____ paperclips long.



Homework

Name: _____
First Name Last Name

Date: _____
Month Date , Year

Add the punctuation.

I see him_

Do you like it_

No way_

Favorite Animals

Bunny

20

Owl

23

Frog

13

What color is the least favorite?

Write the turn-around fact.

$$1 + 4 = 5$$

$$\underline{\quad\quad} + \underline{\quad\quad} = 5$$

Write 5 words in the -all word family.

-all

1. _____

2. _____

3. _____

4. _____

5. _____

Homework

Name: _____
First Name Last Name

Date: _____
Month Date , Year

Draw a picture to help.

I had 5 cars in my toy box. 4 cars were lost by my sister. How many cars are left?

_____ - _____ = _____
_____ cars

Circle real words red.
Circle nonsense words blue.

from frim share
shar print
vesh clock
pants shap

Subtract these problems.

$$20-5=$$

$$20-4=$$

$$20-3=$$

Write a sentence for the picture.



Homework

Name: _____
First Name Last Name

Date: _____
Month Date , Year

Add or subtract these problems.

$$11 + 5 = \underline{\hspace{2cm}}$$

$$14 - 8 = \underline{\hspace{2cm}}$$

$$12 + 7 = \underline{\hspace{2cm}}$$

$$11 + 6 = \underline{\hspace{2cm}}$$

$$12 - 7 = \underline{\hspace{2cm}}$$

Put these words in ABC order

1. _____

2. _____

3. _____


4. _____

5. _____

Word Bank

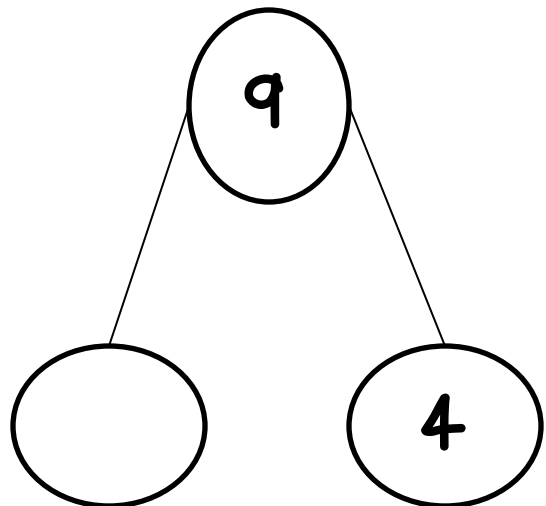
hippo duck
zebra mouse rat

Fill in the missing blend.



bu _____

What addend is missing from the number bond?


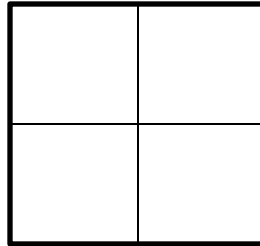




Homework

Name: _____
First Name Last Name

Date: _____
Month Date , Year

Color the squares with 2 halves purple.
Color the squares with 4 quarters yellow.



Circle the root words.

helping

hotter

bigger

colder

smallest

thinking

Circle the real words yellow.

Circle the nonsense words blue.

brick

nest

brem

pell

frog

glip

flag

fлом

flip

Draw a picture to help.

Jack took 6 pens to the library. His friend John took 5 pens to the library. How many pens in all?

_____ + _____ = _____

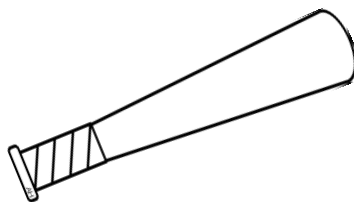
_____ pens

Homework

Name: _____
First Name Last Name


Date: _____
Month Date , Year

Circle the correct word family.



-at


-et



-ot

-og

What do these clocks show?





Write the turn-around fact.

$$5 + 4 = 9$$

$$\underline{\hspace{2cm}} + \underline{\hspace{2cm}} = 9$$

Solve these problems.

$$\begin{array}{r} 5 \\ +6 \\ \hline \end{array} \quad \begin{array}{r} 10 \\ +2 \\ \hline \end{array} \quad \begin{array}{r} 3 \\ +6 \\ \hline \end{array}$$

$$\begin{array}{r} 4 \\ +7 \\ \hline \end{array} \quad \begin{array}{r} 2 \\ +8 \\ \hline \end{array} \quad \begin{array}{r} 3 \\ +4 \\ \hline \end{array}$$

Homework

Name: _____
First Name Last Name

Date: _____
Month Date , Year

Real Words	Nonsense Words

Word Bank

play brat plom brub glug prep

Write the uppercase
alphabet.

A
z

Subtract these facts.

$$14-6=$$

$$12-7=$$

$$11-7=$$

$$16-6=$$

Are these math facts true or false?

$$10+5=11$$

True

False

$$9-3=6$$

True

False

$$3+6=2$$

True

False

$$5-1=4$$

True


False

Homework

Name: _____
First Name Last Name

Date: _____
Month Date , Year

Which 2 words make up this compound word?



puff

bag

book

cup

corn

cake

food

pop

Put these words in ABC Order.

1.

2.

3.

4.

5.

Word Bank

music art gym
library computers

What is missing?

6



What do these clocks show?



Homework

Name: _____
First Name Last Name

Date: _____
Month Date , Year

Write 2 sentences for the picture.



Write the turn-around fact.

$$6 = 4 + 2$$

$$6 = \underline{\quad} + \underline{\quad}$$

Fill in the punctuation.

Do you see me _

I can not do it _

Help _ I'm stuck _

Solve these addition and subtraction facts.

$$19 - 5 = \underline{\quad}$$

$$12 + 3 = \underline{\quad}$$

$$14 - 7 = \underline{\quad}$$

$$17 + 1 = \underline{\quad}$$

$$15 - 4 = \underline{\quad}$$

$$12 + 5 = \underline{\quad}$$

Homework

Name: _____
First Name Last Name

Date: _____
Month Date , Year

Write the number words.

17	
13	
11	

Write 5 words in the -ot word family.

-ot

1.
2.
3.
4.
5.

Add 10 to each of these numbers.

$$9 + 10 = \underline{\hspace{2cm}}$$


$$10 + 10 = \underline{\hspace{2cm}}$$

$$3 + 10 = \underline{\hspace{2cm}}$$

$$13 + 10 = \underline{\hspace{2cm}}$$

$$17 + 10 = \underline{\hspace{2cm}}$$

Fill in the missing blend.



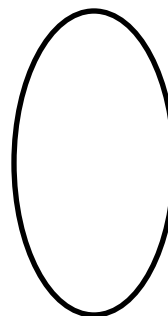



wd _____

Homework

Name: _____
First Name Last Name

Date: _____
Month Date , Year

Show how to split these shapes in half.



Subtract 10 from these numbers.

$$12 - 10 = \underline{\hspace{2cm}}$$

$$15 - 10 = \underline{\hspace{2cm}}$$


$$19 - 10 = \underline{\hspace{2cm}}$$

Fill in the missing blend.



		o	c	k
--	--	---	---	---

Write 2 sentences.




Homework

Name: _____
First Name Last Name

Date: _____
Month Date , Year

What do these clocks show?





Solve the vertical math problems.

$$\begin{array}{r} 2 \\ +3 \\ \hline \end{array} \quad \begin{array}{r} 1 \\ +2 \\ \hline \end{array} \quad \begin{array}{r} 5 \\ +6 \\ \hline \end{array}$$

$$\begin{array}{r} 3 \\ +4 \\ \hline \end{array} \quad \begin{array}{r} 6 \\ +7 \\ \hline \end{array} \quad \begin{array}{r} 3 \\ +4 \\ \hline \end{array}$$

Put the words in ABC Order.

1. _____

2. _____

3. _____

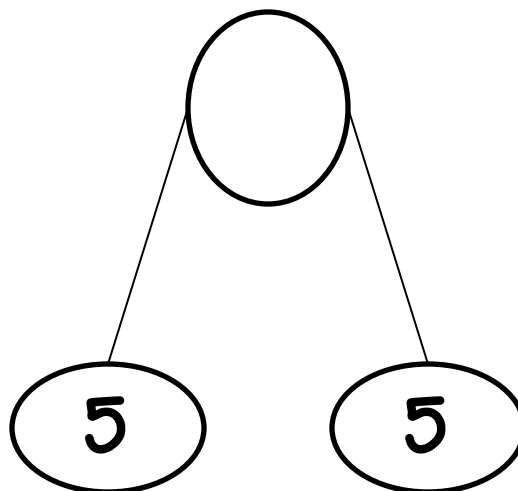
4. _____

5. _____

Word Bank

winter spring seasons
fall summer

What is the sum of the number bond?



Homework

Name: _____
First Name Last Name


Date: _____
Month Date , Year

The love bug is _____ cubes long.

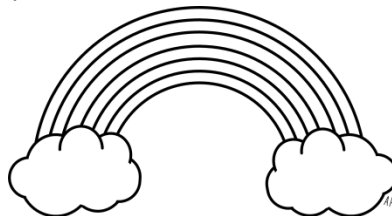


What is missing?

10



Find the 2 words in the compound word.



bow	cloud	rain	sun
shine	sky	red	blue

Write the days of the week.

W

S

T

M

F

T

S

Homework

Name: _____
First Name Last Name

Date: _____
Month Date , Year

Write the turn-around fact.

$$8 = 2 + 6$$

$$8 = \underline{\quad\quad} + \underline{\quad\quad}$$

Put these words in ABC Order.

book
pencil
crayon
scissors
glue

1.

2.

3.

4.


5.

Match these compound words to the pictures.

bookshelf




backpack



popcorn



Show how to split these shapes into quarters.

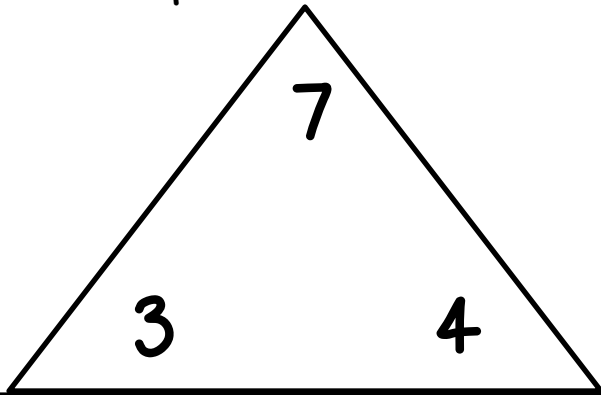


Homework

Name: _____
First Name Last Name

Date: _____
Month Date , Year

Find 4 problems for this fact family.



$$\underline{\quad} + \underline{\quad} = \underline{\quad}$$

$$\underline{\quad} + \underline{\quad} = \underline{\quad}$$

$$\underline{\quad} - \underline{\quad} = \underline{\quad}$$

$$\underline{\quad} - \underline{\quad} = \underline{\quad}$$

Write 4 words in the -ock word family.

-ock

1.

2.

3.

4.

Circle the root words.

smallest

hottest

largest

sweeter

bigger

neater

Solve these near doubles.

$$6+7= \underline{\quad}$$

$$3+4= \underline{\quad}$$

$$5+4= \underline{\quad}$$

$$8+9= \underline{\quad}$$

$$2+3= \underline{\quad}$$

$$7+8= \underline{\quad}$$

Homework

Name: _____
First Name Last Name

Date: _____
Month Date , Year

Write the answer to these doubles addition facts.

$$2+2=$$

$$10+10=$$

$$9+9=$$

$$7+7=$$

$$4+4=$$

Solve these problems.

$$\begin{array}{r} 7 \\ +3 \\ \hline \end{array}$$

$$\begin{array}{r} 6 \\ +3 \\ \hline \end{array}$$

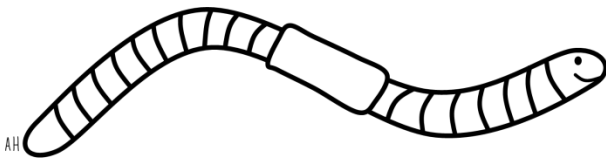
$$\begin{array}{r} 5 \\ +3 \\ \hline \end{array}$$

$$\begin{array}{r} 3 \\ +4 \\ \hline \end{array}$$

$$\begin{array}{r} 4 \\ +3 \\ \hline \end{array}$$

$$\begin{array}{r} 5 \\ +4 \\ \hline \end{array}$$

Fill in the missing blend.



WO _____

Write the number words.

18

16

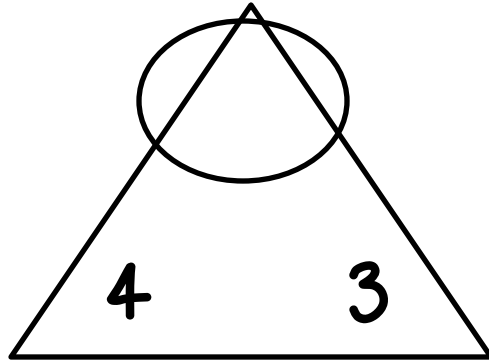
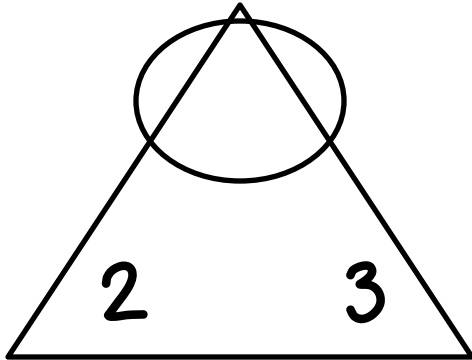
14

Homework

Name: _____
First Name Last Name

Date: _____
Month Date , Year

Complete the sum of the fact families.



Put these words into ABC order.

zip
zoo
zap
zebra

1.
2.
3.
4.

Are these math facts true or false?

$11+1=15$ True or False?

$12+2=14$ True or False?

$10+5=17$ True or False?

What kind of pet do you own?

X		
X		X
X	X	X
dog	cat	fish

What pet has the least amount of owners?

What pet has the most owners?

Homework

Name: _____
First Name Last Name

Date: _____
Month Date , Year

Put the words in ABC order.

goal
shoe
rug
card
quilt

1.

2.

3.

4.

5.

Favorite Season

Winter

35

Summer

33

Fall

31

What is the most favorite season?

Circle the real words red.
Circle nonsense words yellow.

breeze

blaze

brip

drop

plap

graf

brum

grip

froze

What do these clocks show?



Homework

Name: _____
First Name Last Name

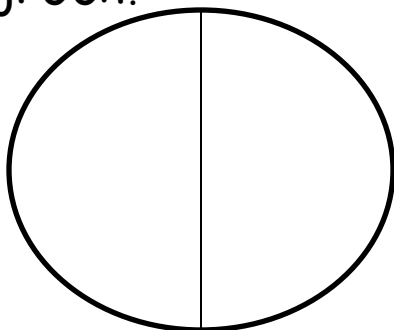
Date: _____
Month Date , Year

Real Words	Nonsense Words

Word Bank

gret treb grin twirl broke swirl

Color one half of the circle blue and the other half green.



Circle the correct family.



-ug

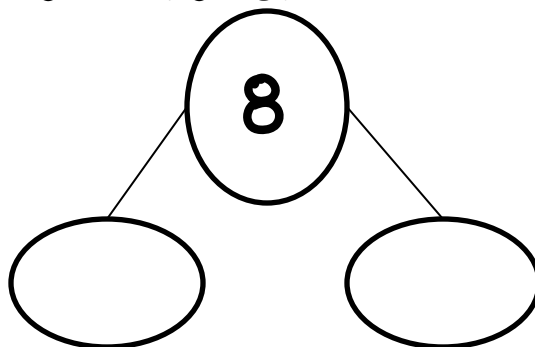
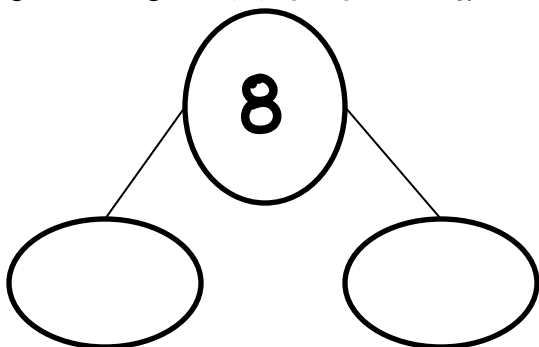
-ut



-ock

-ick

Show two different number bonds for 8.




Homework

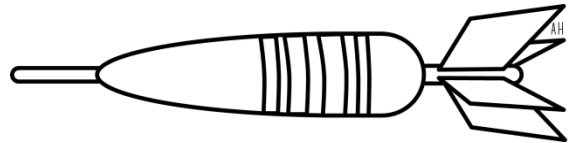
Name: _____
First Name Last Name

Date: _____
Month Date , Year

What is missing?

10	
	

Fill in the missing blend.



da _____

Solve these vertical math problems.

$\begin{array}{r} 10 \\ +1 \\ \hline \end{array}$	$\begin{array}{r} 10 \\ +7 \\ \hline \end{array}$	$\begin{array}{r} 10 \\ +4 \\ \hline \end{array}$
---	---	---

$\begin{array}{r} 10 \\ +2 \\ \hline \end{array}$	$\begin{array}{r} 10 \\ +5 \\ \hline \end{array}$	$\begin{array}{r} 10 \\ +3 \\ \hline \end{array}$
---	---	---

Solve these problems.

$$14 + 3 = \underline{\hspace{2cm}}$$

$$10 - 8 = \underline{\hspace{2cm}}$$

$$14 - 7 = \underline{\hspace{2cm}}$$

$$18 + 1 = \underline{\hspace{2cm}}$$

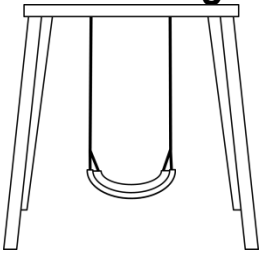
$$13 - 6 = \underline{\hspace{2cm}}$$

Homework

Name: _____
First Name Last Name

Date: _____
Month Date , Year

Fill in the missing blends.



		i	n	g
--	--	---	---	---



		i	n	c	e
--	--	---	---	---	---

Fix the capitals.

i do not see
you. can you
see ms. smith?

Answer these math problems.

$$10 + 7 = \underline{\hspace{2cm}}$$

$$10 + 6 = \underline{\hspace{2cm}}$$

$$10 + 9 = \underline{\hspace{2cm}}$$

Write 2 words from each word family.

-at	-et	-ot

Homework

Name: _____
First Name Last Name

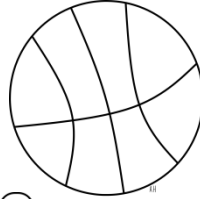
Date: _____
Month Date , Year

What time do these clocks show?

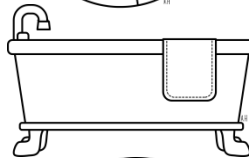




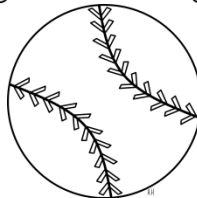
Match the compound words to the pictures.



bathtub



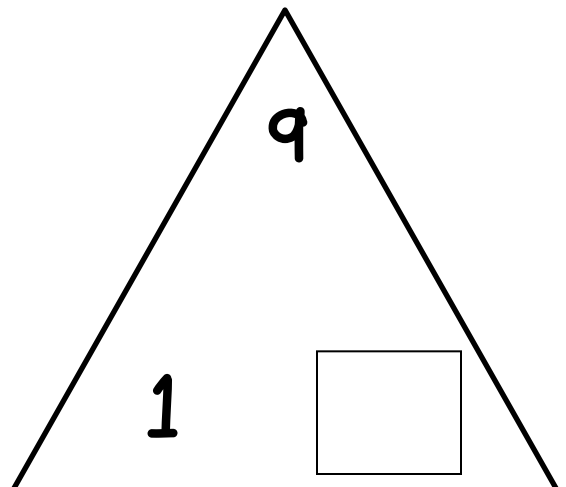
basketball



baseball

Draw two pictures from the -ug word family.

Write the missing part to this fact family.

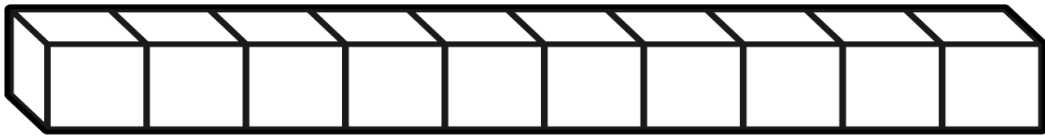



Homework

Name: _____
First Name Last Name

Date: _____
Month Date , Year

The bat is _____ cubes long.



Fix the capital letters.

my sister's name
is jess. she likes
to go to disney
world.

Write the turn-around
fact.

$$2 + 7 = 9$$
$$9 = \underline{\quad} + \underline{\quad}$$

Real Words	Nonsense Words

Word Bank

grip

bird

glim

bath

shup

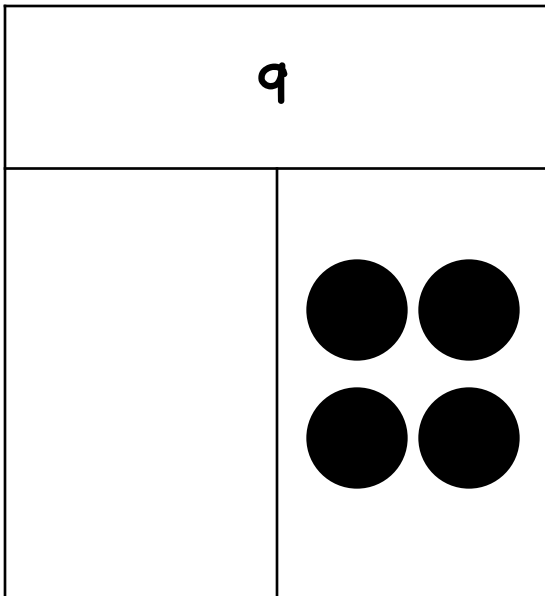
chem

Homework

Name: _____
First Name Last Name

Date: _____
Month Date , Year

What is missing?



Fix the list and put the words in ABC order.

star
ship
seat
sink
soap

1.

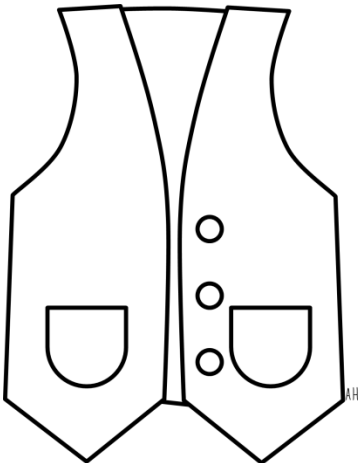
2.

3.

4.

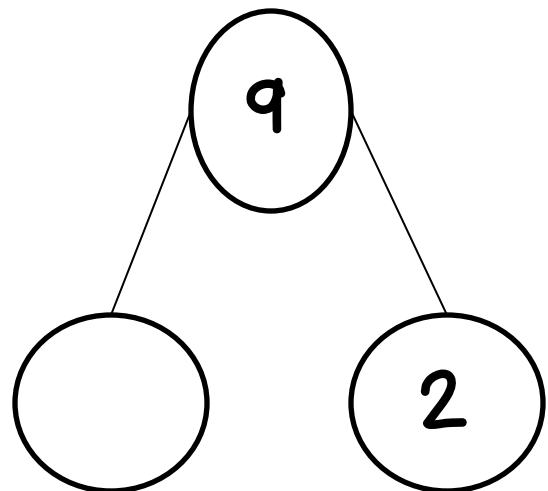
5.

Fill in the missing blend.



ve _____

What is the missing addend in this number bond?




Homework

Name: _____
First Name Last Name

Date: _____
Month Date , Year


Circle the compound word for each picture.



sunflower
flowersun

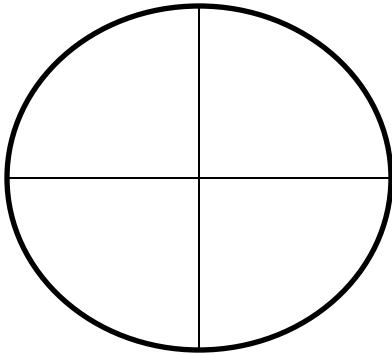


cornpop
popcorn



flydraon
dragonfly

Color the quarters red,
green, blue, and yellow.



Write 4 words in the -et
word family.

-et

1.

2.

3.

4.

Solve these math problems.

5

+3

4

+3

8

+3

1

+3

6

+3

Homework

Name: _____
First Name Last Name

Date: _____
Month Date , Year

Hair Color	
Red	3
Blonde	7
Brunette	10

What group had the least?

What time do these clocks show?





Solve these math problems.

$$\begin{array}{r} 11 \\ +2 \\ \hline \end{array}$$

$$12$$

$$+3$$

$$14$$

$$+1$$

$$\begin{array}{r} 11 \\ +5 \\ \hline \end{array}$$

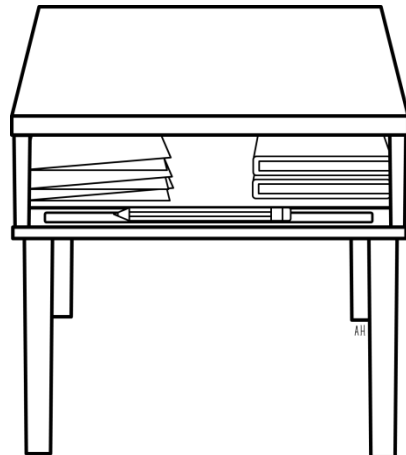
$$10$$

$$+7$$

$$12$$

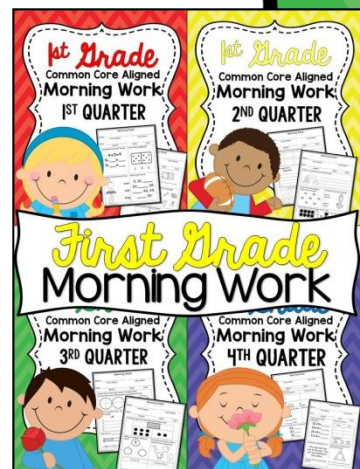
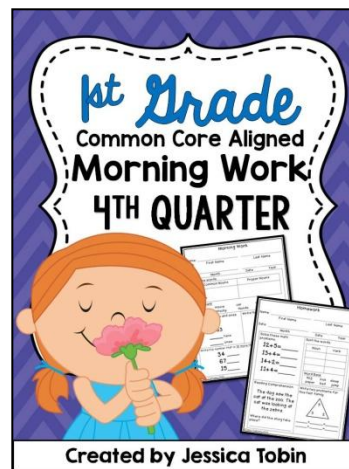
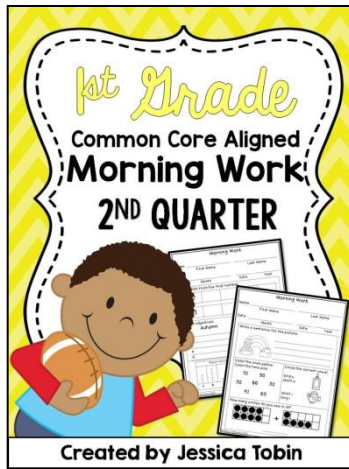
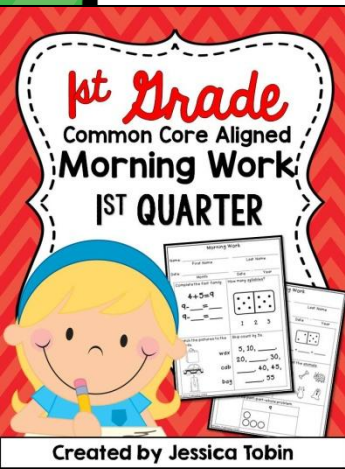
$$+4$$

Fill in the missing blend.



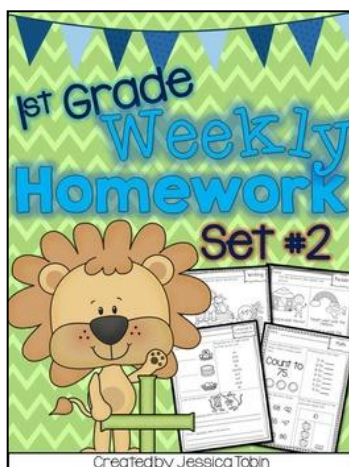
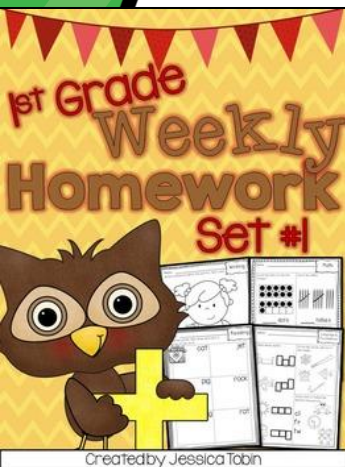


de _____

Like this?
Check these out...



1st Grade Morning Work



1st Grade Homework


Thank you for your download.



How to keep
updated with
freebies,
new products,
and giveaways!



I'd love your feedback!



	F	D	D+	C	C+	B	B+	A	No Opinion
Overall Quality	<input type="radio"/>	<input type="radio"/>	<input type="radio"/>	<input type="radio"/>	<input type="radio"/>	<input type="radio"/>	<input type="radio"/>	<input type="radio"/>	<input type="radio"/>
Accuracy	<input type="radio"/>	<input type="radio"/>	<input type="radio"/>	<input type="radio"/>	<input type="radio"/>	<input type="radio"/>	<input type="radio"/>	<input type="radio"/>	<input type="radio"/>
Practicality	<input type="radio"/>	<input type="radio"/>	<input type="radio"/>	<input type="radio"/>	<input type="radio"/>	<input type="radio"/>	<input type="radio"/>	<input type="radio"/>	<input type="radio"/>
Thoroughness	<input type="radio"/>	<input type="radio"/>	<input type="radio"/>	<input type="radio"/>	<input type="radio"/>	<input type="radio"/>	<input type="radio"/>	<input type="radio"/>	<input type="radio"/>
Creativity	<input type="radio"/>	<input type="radio"/>	<input type="radio"/>	<input type="radio"/>	<input type="radio"/>	<input type="radio"/>	<input type="radio"/>	<input type="radio"/>	<input type="radio"/>
Clarity	<input type="radio"/>	<input type="radio"/>	<input type="radio"/>	<input type="radio"/>	<input type="radio"/>	<input type="radio"/>	<input type="radio"/>	<input type="radio"/>	<input type="radio"/>



Leave a Comment...

☐ Email me when the seller responds

SEND

AVERAGE RATINGS

Overall Quality: ★★★★★ 4.0 Thoroughness: ★★★★★ 4.0 Total: ★★★★★ 4.0
 Accuracy: ★★★★★ 4.0 Creativity: ★★★★★ 4.0 6 ratings
 Practicality: ★★★★★ 4.0 Clarity: ★★★★★ 4.0

Graphics Used

